

Name: \_\_\_\_\_



# Math Buzz

The Brentwood Auditorium seats 943 people. Last night, 636 people came to see a concert. How many more people could have been seated?

Show your work

answer: \_\_\_\_\_ people

Fill in the missing numbers.

103	559

288	
846	

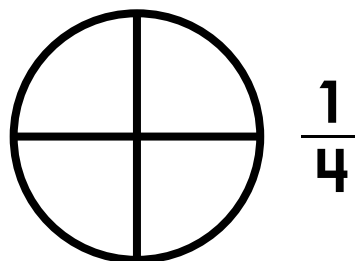
Write the number in expanded and word form.

**863**

expanded: \_\_\_\_\_

word: \_\_\_\_\_


















Color one-fourth of the circle.




Color one-third of the rectangle.



## Room 14's Favorite Subjects

Math	     
Science	   
Reading	    
Writing	 

Each  = 2 votes


How many students chose math as their favorite subject?

answer: \_\_\_\_\_

How many students chose writing as their favorite subject?

answer: \_\_\_\_\_

Name: \_\_\_\_\_



# Math Buzz



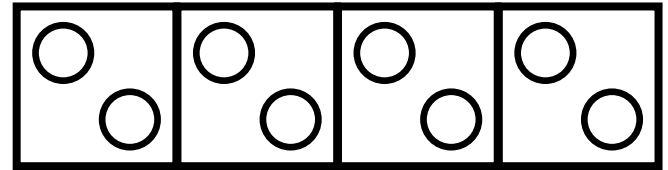
Marco wants to buy a book that costs \$4.29 from the school store. How much money does Marco have?

\_\_\_\_\_

Does he have enough to buy it?

**yes**

**no**



$$2 + 2 + 2 + 2 = \underline{\hspace{2cm}}$$

$$4 \text{ groups of } 2 = \underline{\hspace{2cm}}$$

$$4 \times 2 = \underline{\hspace{2cm}}$$

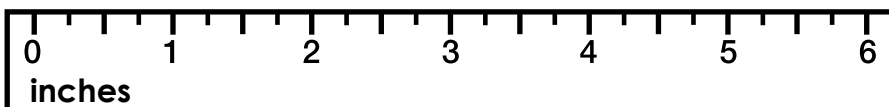
Write the number in expanded and word form.

**358**

expanded: \_\_\_\_\_

word: \_\_\_\_\_

How long is the feather?



The feather is \_\_\_\_\_ inches long.

Draw a shape that has 4 equal sides.

Name: \_\_\_\_\_




## Math Buzz


There are 572 students enrolled in Bonner Elementary School, and 394 students enrolled in Bonner Middle School. How many students are enrolled in both schools combined?

Show your work

Elementary School  
572 students



Middle School  
394 students



answer: \_\_\_\_\_ students

Round to the **nearest ten**.

92 \_\_\_\_\_ 46 \_\_\_\_\_

Round to the **nearest hundred**.

532 \_\_\_\_\_ 689 \_\_\_\_\_


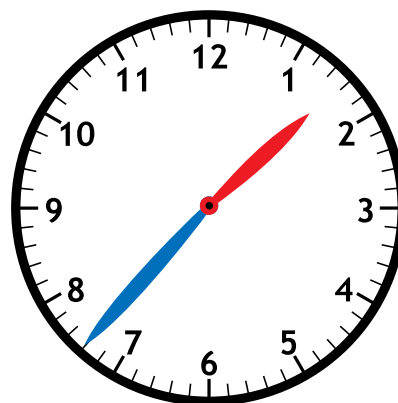
Circle the digits in the ones place.

3 5 4

7 8

5 9 3

Fill in the time on the digital clock to show the same time on the analog clock.




Add. Show your work

$$\begin{array}{r} 550 \\ + 271 \\ \hline \end{array}$$

Find the sum of 233 and 757. \_\_\_\_\_

$$707 + 147 = \underline{\hspace{2cm}}$$

Name: \_\_\_\_\_



## Math Buzz

Circle the digits in the tens place.

54

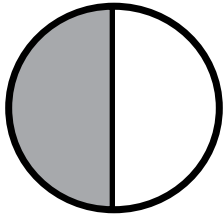
673

834

There were 618 tickets sold at the Glen Park Movie Theater on Saturday. On Sunday, 384 tickets were sold. How many more tickets were sold on Saturday than Sunday?

Show your work

What fraction of the circle is shaded?



$\frac{1}{2}$

$\frac{1}{3}$

$\frac{1}{4}$

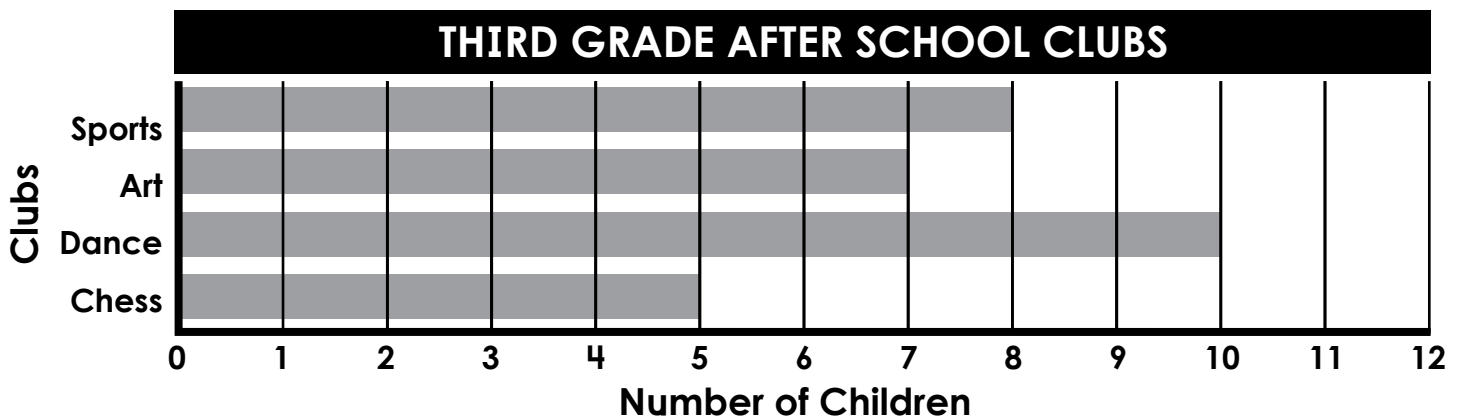
answer: \_\_\_\_\_ tickets

Subtract. Show your work

Find the difference between 865 and 307.

$$578 - 286 = \underline{\hspace{2cm}}$$

$$\begin{array}{r} 752 \\ - 294 \\ \hline \end{array}$$



How many children are in Dance Club?

answer: \_\_\_\_\_

Which club has the least amount of children?

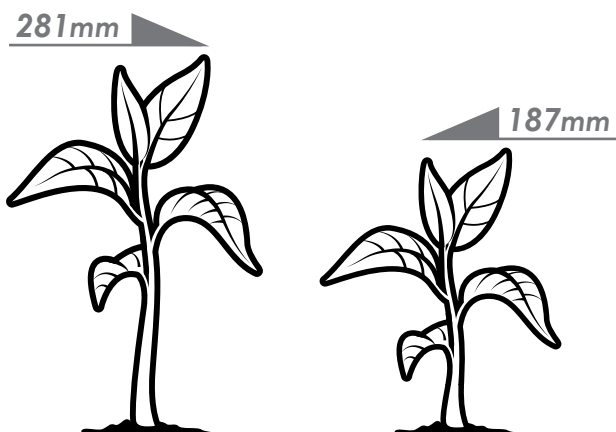
answer: \_\_\_\_\_

Name: \_\_\_\_\_



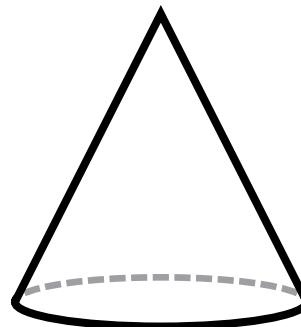
# Math Buzz

Mikayla and Jorge grew bean plants for a science experiment. Mikayla's plant was 281 millimeters tall. Jorge's plant was 187 millimeters tall. How much taller was Mikayla's plant than Jorge's?



answer: \_\_\_\_\_ millimeters

Choose the name of the shape.



sphere


cylinder

cone


Which holds **less** liquid? Circle your answer.



tea cup



bathtub



$$3 + 3 + 3 + 3 + 3 = \underline{\hspace{2cm}}$$

$$5 \text{ groups of } 3 = \underline{\hspace{2cm}}$$

$$5 \times 3 = \underline{\hspace{2cm}}$$

Circle the digits in the hundreds place.

4 3 1

5 4 6

7 4 8



The Brentwood Auditorium seats 943 people. Last night, 636 people came to see a concert. How many more people could have been seated?

Show your work

$$943 - 636 = 307$$

answer: 307 people

Write the number in expanded and word form.

**863**

expanded:  $800 + 60 + 3$

word: eight hundred sixty-three

Fill in the missing numbers.

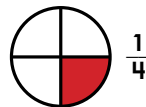
<b>662</b>	
103	559

$$(103 + 559 = 662)$$


288	558
<b>846</b>	

$$(846 - 288 = 558)$$

Color one-fourth of the circle.



Color one-third of the rectangle.



Survey 120 Students Subjects											
Math	<input checked="" type="radio"/>	<input checked="" type="radio"/>	<input checked="" type="radio"/>	<input checked="" type="radio"/>	<input checked="" type="radio"/>	<input checked="" type="radio"/>	<input checked="" type="radio"/>	<input checked="" type="radio"/>	<input checked="" type="radio"/>	<input checked="" type="radio"/>	<input checked="" type="radio"/>
Science	<input checked="" type="radio"/>	<input checked="" type="radio"/>	<input checked="" type="radio"/>	<input checked="" type="radio"/>	<input checked="" type="radio"/>	<input checked="" type="radio"/>	<input checked="" type="radio"/>	<input checked="" type="radio"/>	<input checked="" type="radio"/>	<input checked="" type="radio"/>	<input checked="" type="radio"/>
Reading	<input checked="" type="radio"/>	<input checked="" type="radio"/>	<input checked="" type="radio"/>	<input checked="" type="radio"/>	<input checked="" type="radio"/>	<input checked="" type="radio"/>	<input checked="" type="radio"/>	<input checked="" type="radio"/>	<input checked="" type="radio"/>	<input checked="" type="radio"/>	<input checked="" type="radio"/>
Writing	<input checked="" type="radio"/>	<input checked="" type="radio"/>	<input checked="" type="radio"/>	<input checked="" type="radio"/>	<input checked="" type="radio"/>	<input checked="" type="radio"/>	<input checked="" type="radio"/>	<input checked="" type="radio"/>	<input checked="" type="radio"/>	<input checked="" type="radio"/>	<input checked="" type="radio"/>

Each ☒ = 2 votes

How many students chose math as their favorite subject?

answer: 12

How many students chose writing as their favorite subject?

answer: 4



Marco wants to buy a book that costs \$4.29 from the school store. How much money does Marco have?

\$3.91

Does he have enough to buy it.

yes

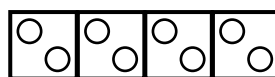
no

Write the number in expanded and word form.

**358**

expanded:  $300 + 50 + 8$

word: three hundred fifty-eight

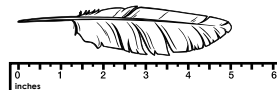


$$2 + 2 + 2 + 2 = \underline{8}$$

$$4 \text{ groups of } 2 = \underline{8}$$

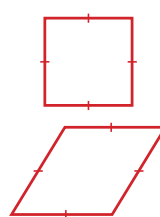
$$4 \times 2 = \underline{8}$$

How long is the feather?



The feather is 5 inches long.

Draw a shape that has 4 equal sides.



Answers may vary.

There are 572 students enrolled in Bonner Elementary School, and 394 students enrolled in Bonner Middle School. How many students are enrolled in both schools combined?

Show your work

$$572 + 394 = 966$$

answer: 966 students

Round to the nearest ten.

**92** 90 **46** 50

Round to the nearest hundred.

**532** 500 **689** 700

Fill in the time on the digital clock to show the same time on the analog clock.



**1:37**

Circle the digits in the ones place.

**3 5** 4

**7** 8

**5 9** 3

Add. Show your work

Find the sum of 233 and 757.

990

$$707 + 147 = \underline{854}$$

$$\begin{array}{r} 1 \\ 550 \\ + 271 \\ \hline 821 \end{array}$$

Circle the digits in the tens place.

5 **4**

**6** 7 **3**

**8** 3 **4**

There were 618 tickets sold at the Glen Park Movie Theater on Saturday. On Sunday, 384 tickets were sold. How many more tickets were sold on Saturday than Sunday?

Show your work

$$618 - 384 = 234$$

answer: 234 tickets

Subtract. Show your work

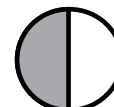
Find the difference between **865** and **307**.

558

$$578 - 286 = \underline{292}$$

$$\begin{array}{r} 14 \\ 6 \ 9 \ 12 \\ 752 \\ - 294 \\ \hline 458 \end{array}$$

What fraction of the circle is shaded?



$\frac{1}{2}$   $\frac{1}{3}$   $\frac{1}{4}$

THIRD GRADE AFTER SCHOOL CLUBS											
Clubs											
Sports											
Art											
Dance											
Chess											
	1	2	3	4	5	6	7	8	9	10	11
	Number of Children										

How many children are in Dance Club?

answer: 10

Which club has the least amount of children?

answer: chess

Mikayla and Jorge grew bean plants for a science experiment. Mikayla's plant was 281 millimeters tall. Jorge's plant was 187 millimeters tall. How much taller was Mikayla's plant than Jorge's?

$$281 - 187 = 94$$

answer: 94 millimeters

Choose the name of the shape.



sphere cylinder cone

Which holds less liquid? Circle your answer.



tea cup

bathtub



$$3 + 3 + 3 + 3 + 3 = \underline{15}$$

$$5 \text{ groups of } 3 = \underline{15}$$

$$5 \times 3 = \underline{15}$$

Circle the digits in the hundreds place.

4 **3** **1**

5 **4** **6**

7 **4** **8**