


Name: _____



Math Buzz

Last week, Trey posted one of his band's music videos to their social media page. It got 638 views. This week, he posted another video and it got 891 views. How many views did the music videos get in all?

Show your work

answer: _____ views

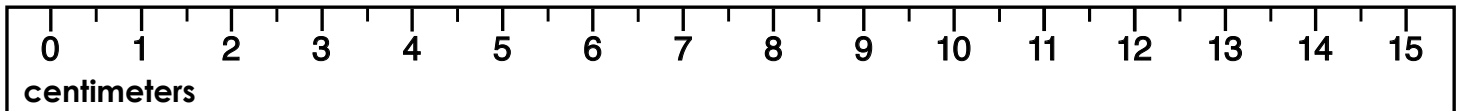
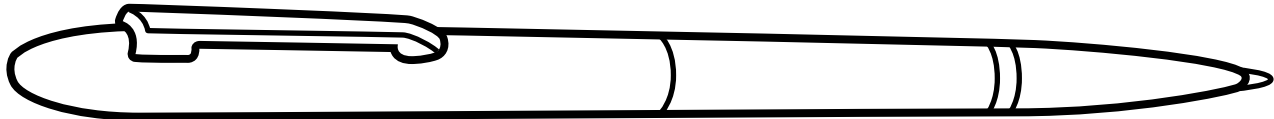
Subtract. Show your work

Subtract 508 from 843.

$$967 - 688 = \underline{\hspace{2cm}}$$

$$\begin{array}{r} 810 \\ - 469 \\ \hline \end{array}$$

How much shorter is the glue stick than the pen?



answer: _____ centimeters


Count by 5s.

250, _____, 260, _____, 270

_____, 110, 115, 120, _____

375, 380, _____, _____, 395

Choose the name of the shape.




cone

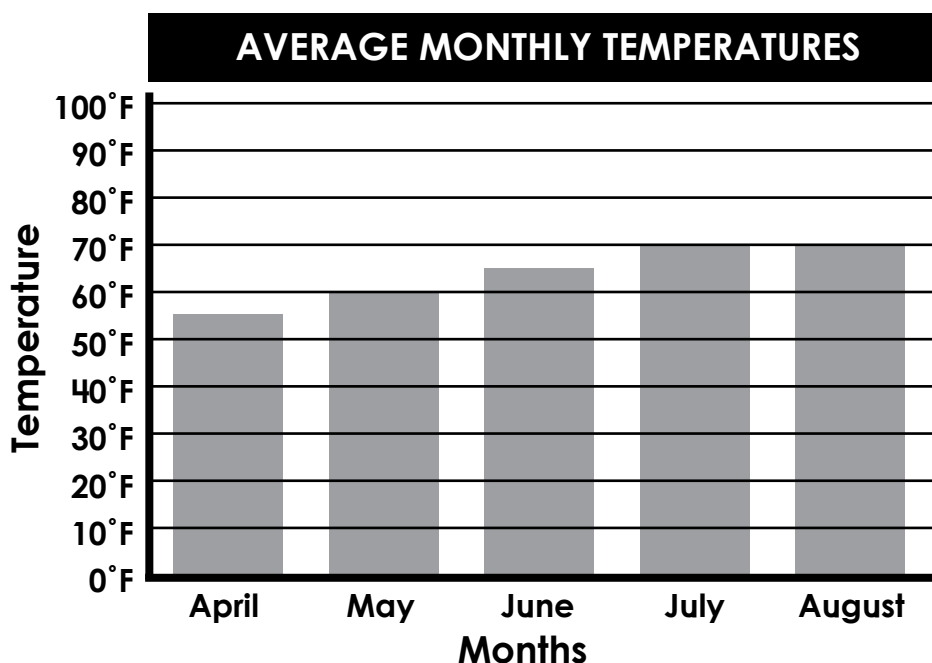
cylinder

sphere

Name: _____



Math Buzz



What is the average temperature in July? _____


What is the average temperature in April? _____

What is the average temperature in May? _____

Which box shows 42¢ using the fewest number of coins?



Kai divided his garden into equal squares to plant different flowers. How many squares does he have?



There are _____ rows.

There are _____ columns.

There are _____ squares.

Round to the **nearest ten**.

52 _____ **438** _____


Round to the **nearest hundred**.

86 _____ **328** _____

Circle the odd numbers.

61 **80** **23** **55** **32**

94 **26** **47** **39** **66**



Name: _____

Math Buzz

Draw a shape that has zero sides and zero angles.

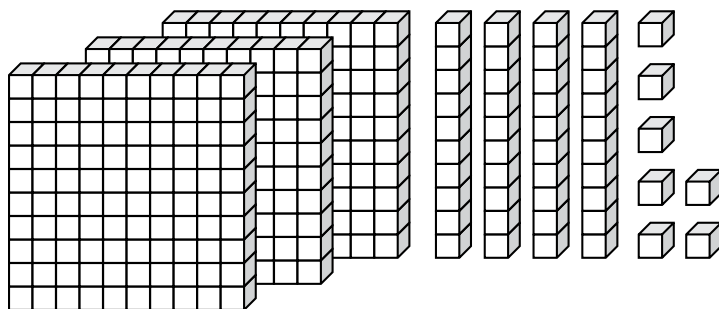
Complete the pattern.

234, 334, 434, _____ , _____

562, 662, 762, _____ , _____

175, 275, 375, _____ , _____

Count the blocks.



Standard Form: _____

Word Form: _____

Expanded Form: _____

The Belseth family is driving 334 miles from Minnesota to Wisconsin. They stopped for lunch after driving the first 179 miles. How many miles do they have left to drive after lunch?

Show your work

Draw horizontal lines to divide the rectangle into **thirds**.




Draw vertical lines to divide the rectangle into **thirds**.



answer: _____ miles

Name: _____



Math Buzz

Hillsdale Elementary School won the county reading competition with a total of 566 books read in one school year. Chatham Elementary School came in second place with 398 books read. How many more books did the students at Hillsdale read than Chatham?

Show your work

answer: _____ books

Add. Show your work

Add 826 and 339.

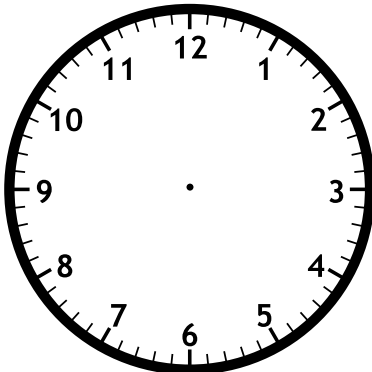
763 + 119 = _____

$$\begin{array}{r} 354 \\ + 175 \\ \hline \end{array}$$

Order the numbers from **greatest to least**.

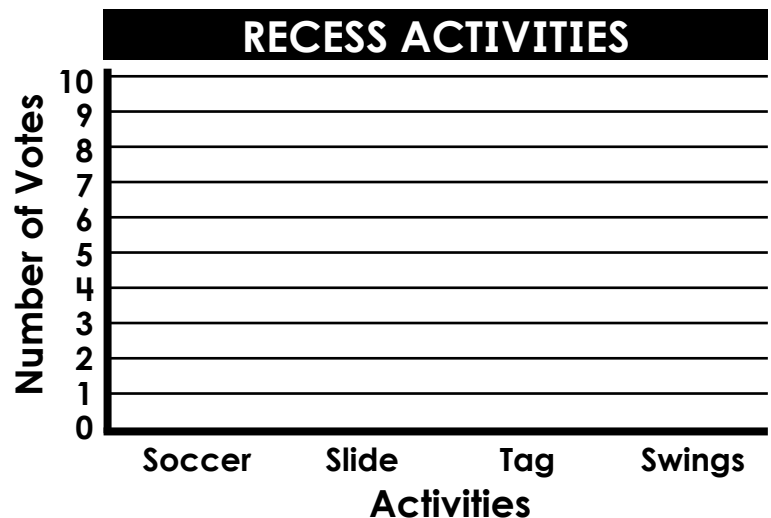
639 303 817

Draw the hands on the clock to match the time shown.



Miguel asked his classmates what their favorite recess activities were. He tracked the data using a tally chart. Use his tally chart to fill in the bar graph.

Activites	Number of Votes
Soccer	III
Slide	I
Tag	III
Swings	II




Name: _____



Math Buzz

What fraction of the square is shaded?



$\frac{1}{2}$
 $\frac{1}{3}$
 $\frac{1}{4}$

Draw a line to match each shape with its attribute.

hexagon

4 equal sides





square

6 angles


pentagon

5 sides

Juliette is pouring lemonade for her friends. She set up 4 glasses and put 4 ice cubes in each glass. How many ice cubes did she use in all?



answer: _____ ice cubes



6 groups of 5 = _____

6 x 5 = _____

Circle the values of the underlined digits.

302

3 30 300

712

7 70 700



Last week, Trey posted one of his band's music videos to their social media page. It got 638 views. This week, he posted another video and it got 891 views. How many views did the music videos get in all?

Show your work

$$638 + 891 = 1,529$$

answer: 1,529 views

Subtract. Show your work

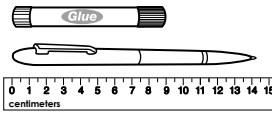
Subtract 508 from 843.

335

$$967 - 688 = 279$$

$$\begin{array}{r} 967 \\ - 688 \\ \hline 279 \end{array}$$

How much shorter is the glue stick than the pen?



$$14 - 9 = 5$$

answer: 5 centimeters

Count by 5s.

250, 255, 260, 265, 270

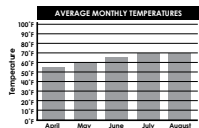
105, 110, 115, 120, 125

375, 380, 385, 390, 395

Choose the name of the shape.



cone cylinder sphere




What is the average temperature in July? 70°F


What is the average temperature in April? 55°F

What is the average temperature in May? 60°F

Which box shows 42¢ using the fewest number of coins?



Kai divided his garden into equal squares to plant different flowers. How many squares does he have?



There are 2 rows.

There are 4 columns.

There are 8 squares.

Round to the nearest ten.

52 50 438 440

Round to the nearest hundred.

86 100 328 300

Circle the odd numbers.

61 80 23 55 32
94 26 47 39 66

Draw a shape that has zero sides and zero angles.



(Note: answers may vary)

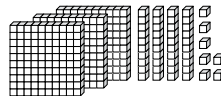
Complete the pattern.

234, 334, 434, 534, 634

562, 662, 762, 862, 962

175, 275, 375, 475, 575

Count the blocks.



Standard Form:

347

Word Form:

three hundred forty-seven

Expanded Form:

300 + 40 + 7

The Belseth family is driving 334 miles from Minnesota to Wisconsin. They stopped for lunch after driving the first 179 miles. How many miles do they have left to drive after lunch?

Show your work

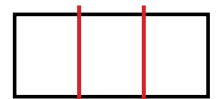
$$334 - 179 = 155$$

answer: 155 miles

Draw horizontal lines to divide the rectangle into thirds.



Draw vertical lines to divide the rectangle into thirds.



Hillsdale Elementary School won the county reading competition with a total of 566 books read in one school year. Chatham Elementary School came in second place with 398 books read. How many more books did the students at Hillsdale read than Chatham?

Show your

$$566 - 398 = 168$$

answer: 168 books

Add. Show your work

Add 826 and 339.

1,165

$$763 + 119 = 882$$

$$\begin{array}{r} 763 \\ + 119 \\ \hline 882 \end{array}$$

Order the numbers from greatest to least.

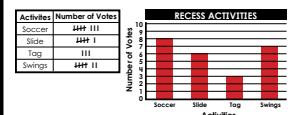
639 303 817

817 639 303


Draw the hands on the clock to match the time shown.



Miguel asked his classmates what their favorite recess activities were. He tracked the data using a tally chart. Use his tally chart to fill in the bar graph.



What fraction of the square is shaded?



1/2

1/3

1/4

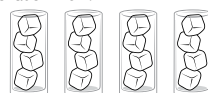
Draw a line to match each shape with its attribute.

hexagon 4 equal sides

square 6 angles

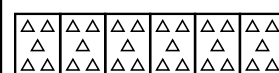
pentagon 5 sides

Juliette is pouring lemonade for her friends. She set up 4 glasses and put 4 ice cubes in each glass. How many ice cubes did she use in all?



$$4 \times 4 = 16$$

answer: 16 ice cubes



6 groups of 5 = 30

6 x 5 = 30

Circle the values of the underlined digits.

302

3 30 300

712

7 70 700