

Name: _____

Special Number

The special number is

123

Write the number in expanded form.

100 + _____ + _____

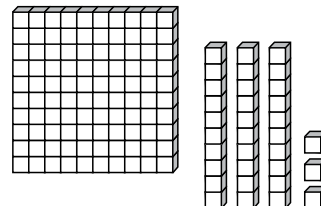
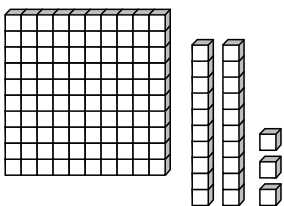
The value of the digit 3 is _____.

The value of the digit 1 is _____.

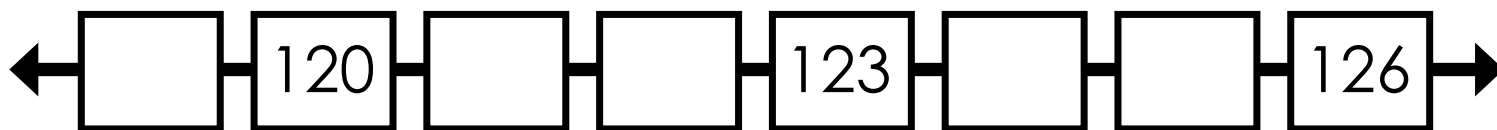
The value of the digit 2 is _____.

even**odd**_____ **ones**_____ **tens**_____ **hundreds**

Which set of blocks shows 123? (Circle one.)



Fill in the empty boxes on the number line.



100 more than 123 is _____.

10 less than 123 is _____.

1 more than 123 is _____.

10 less than 123 is _____.

Compare. $<$, $>$, or $=$ 123 321231 123120 123