


Name: _____



Math Buzz

Solve.

$9 \times 1 =$

$5 \times 0 =$

$4 \times 0 =$

$2 \times 1 =$

$7 \times 1 =$

$6 \times 0 =$

$3 \times 0 =$

$8 \times 1 =$

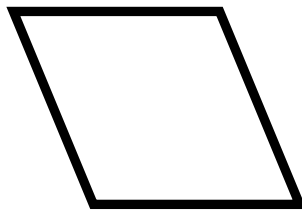
Kira works at the lemonade stand at the fair. She started the day with 4,015 lemons, and ended the day with 2,133 lemons. How many lemons did Kira use making lemonade?

Show your work


answer: _____ lemons

How many right angles does each quadrilateral have?









Circle the numbers that have a **9** in the tens place.

398 **1,239** **915** **7,192**


1,569 **297** **3,497** **8,719**

Find the sum.

$$\begin{array}{r} 372 \\ 156 \\ + 265 \\ \hline \end{array}$$

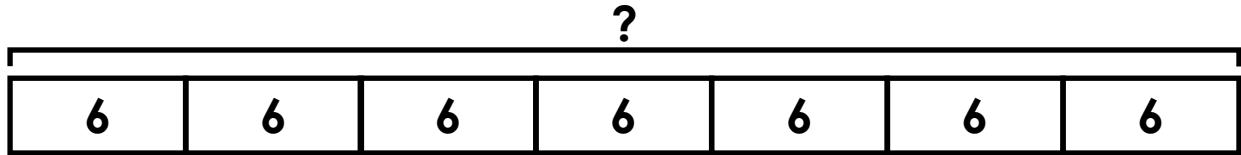
$$\begin{array}{r} 259 \\ 868 \\ + 504 \\ \hline \end{array}$$

Name: _____



Math Buzz

There are 7 teams in the Jamestown Junior Basketball League. Each team has 6 players. How many players are in the league in all?



_____ x _____ = _____

answer: _____ players

Write the number in expanded and word form.

3,294

expanded: _____

word: _____

Samir has one twenty dollar bill, two five dollar bills, three one dollar bills and 4 dimes. How much money does Samir have?

Show your work


Fill in the missing multiples of 3.

3, _____, 9, _____, 15,

_____, 21, _____, 27, _____

answer: _____

Which is about 18 centimeters?

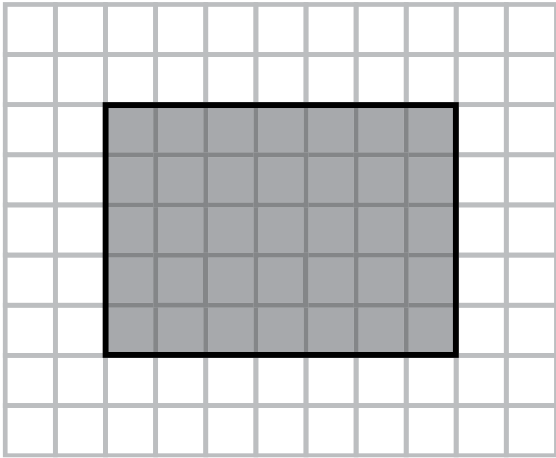


Name: _____



Math Buzz

Count the square units to find the area of the shaded rectangle.



answer: _____ square units

Mrs. Garcia's class had a bake sale fundraiser. They had 24 cupcakes, 36 brownies and 60 cookies to sell. When the sale was over, they had 23 baked goods left.

Show your work

How many baked goods did they start with? _____

How many baked goods did they sell? _____

Circle the numbers that have a **4** in the hundreds place.

784 **5,456** **497** **1,564**

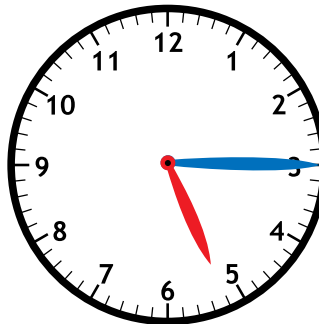
2,495 **462** **8,432** **4,351**

Fill in the missing multiples of 4.

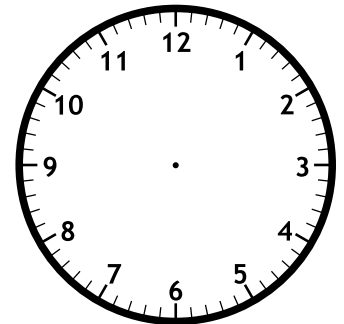
4, _____, **12**, _____, **20**,

_____, **28**, _____, **36**, _____

Gillian has dance class every Tuesday. Her class starts at 5:15 and it is 45 minutes long. What time does her class end? Draw the hands to show the end time.




Start Time



End Time

answer: _____

Name: _____



Math Buzz

Write the number in expanded and word form.

8,062

expanded: _____

word: _____

In September Pauly's Pizzeria sold 1,698 pizzas. In October, they sold 2,232 pizzas. How many pizzas did they sell in September and October combined?

Show your work

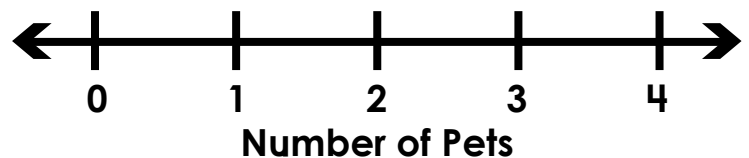
answer: _____ pizzas

Mr. Moreno asked his class how many pets they have at home. He tracked their answers using a tally chart. Use his data to create a line plot.


Number of Pets at Home

key: X = 1 student


Number of Pets	Number of Students
0	HHH
1	HHH IIII
2	HHH I
3	III
4	II



Which is about 8 pounds?



goldfish



cat

Fill in the missing multiples of 6.

6, _____, 18, _____, 30,


_____, 42, _____, 54, _____

Name: _____



Math Buzz

Use the array to find the product.



$$5 \times 6 = \underline{\hspace{2cm}}$$

Circle the numbers that have a **7** in the thousands place.

8,765 7,623 1,457 782

7,321 6,547 7,124 7,096

Jerry's Juice Stand

Very Berry.....\$6

Tropical Twist.....\$8

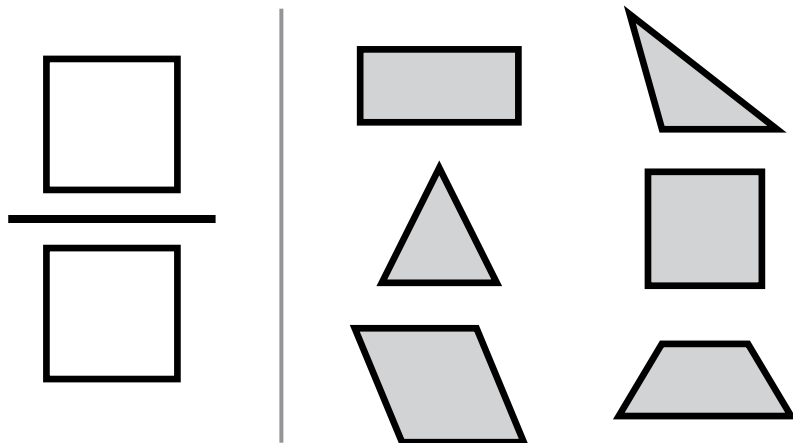
Peanut Butter Banana.....\$10

Shane went to Jerry's Juice Stand. He ordered 1 tropical twist smoothie and 1 very berry smoothie. He gave the cashier \$20. How much change did Shane get back?

Show your work

answer: _____

What fraction of the shapes have 4 corners?



Complete the table.

Input	Output
514	
908	773
3,479	
6,276	

Rule: Subtract 135



Solve.

$9 \times 1 = 9 \quad 5 \times 0 = 0$

$4 \times 0 = 0 \quad 2 \times 1 = 2$

$7 \times 1 = 7 \quad 6 \times 0 = 0$

$3 \times 0 = 0 \quad 8 \times 1 = 8$

Kira works at the lemonade stand at the fair. She started the day with 4,015 lemons, and ended the day with 2,133 lemons. How many lemons did Kira use making lemonade?

Show your work

$4,015 - 2,133 = 1,882$

answer: 1,882 lemons

How many right angles does each quadrilateral have?



4 right angles



0 right angles



0 right angles



4 right angles

Circle the numbers that have a 9 in the tens place.

398, 1,239, 915, 7,192

1,569, 297, 3,497, 8,719

Find the sum.

$$\begin{array}{r} 11 \\ 372 \\ 156 \\ + 265 \\ \hline 793 \end{array} \quad \begin{array}{r} 12 \\ 259 \\ 868 \\ + 504 \\ \hline 1,631 \end{array}$$

There are 7 teams in the Jamestown Junior Basketball League. Each team has 6 players. How many players are in the league in all?

Show your work

?	6	6	6	6	6	6
---	---	---	---	---	---	---

$7 \times 6 = 42$

answer: 42 players

Write the number in expanded and word form.

3,294

expanded:

$3,000 + 200 + 90 + 4$

word: three thousand,

two hundred ninety-four

Samir has one twenty dollar bill, two five dollar bills, three one dollar bills and 4 dimes. How much money does Samir have?

Show your work

$\$20 + \$10 + \$3 + 40¢ = \33.40

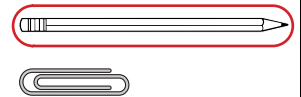
answer: \\$33.40

Fill in the missing multiples of 3.


3, 6, 9, 12, 15,

18, 21, 24, 27, 30

Which is about 18 centimeters?



Count the square units to find the area of the shaded rectangle.



$5 \times 7 = 35$

answer: 35 square units

Circle the numbers that have a 4 in the hundreds place.

784, 5,456, 497, 1,564

2,495, 462, 8,432, 4,351

Fill in the missing multiples of 4.

4, 8, 12, 16, 20,

24, 28, 32, 36, 40

Mrs. Garcia's class had a bake sale fundraiser. They had 24 cupcakes, 36 brownies and 60 cookies to sell. When the sale was over, they had 23 baked goods left.

Show your work

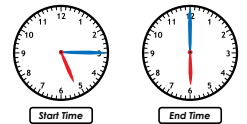
How many baked goods did they start with? 120

$24 + 36 + 60 = 120$

How many baked goods did they sell? 97

$120 - 23 = 97$

Gillian has dance class every Tuesday. Her class starts at 5:15 and it is 45 minutes long. What time does her class end?



answer: 6:00

Write the number in expanded and word form.

8,062

expanded:

$8,000 + 60 + 2$

word: eight thousand,

sixty-two

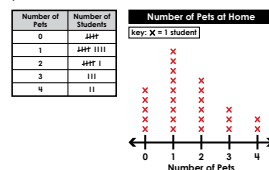
In September Pauly's Pizzeria sold 1,698 pizzas. In October, they sold 2,232 pizzas. How many pizzas did they sell in September and October combined?

Show your work


$1,698 + 2,232 = 3,930$

answer: 3,930 pizzas

Mr. Moreno asked his class how many pets they have at home. He tracked their answers using a tally chart. Use his data to create a line plot.



Which is about 8 pounds?



goldfish


cat

Fill in the missing multiples of 6.

6, 12, 18, 24, 30,

36, 42, 48, 54, 60

Use the array to find the product.



$5 \times 6 = 30$

Shane went to Jerry's Juice Stand. He ordered 1 tropical twist smoothie and 1 very berry smoothie. He gave the cashier \$20. How much change did Shane get back?

Show your work

$\$8 + \$6 = \$14$

$\$20 - \$14 = \$6$

answer: \\$6

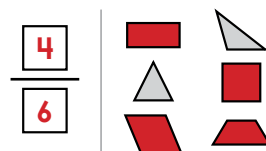
Jerry's Juice Stand	
Very Berry.....\$4	
Tropical Twist.....\$8	
Peanut Butter Banana.....\$10	

Circle the numbers that have a 7 in the thousands place.

8,765, 7,623, 1,457, 782

7,321, 6,547, 7,124, 7,096

What fraction of the shapes have 4 corners?



$\frac{2}{3}$ also accepted

Complete the table.

Input	Output
514	<u>379</u>
908	773
3,479	<u>3,344</u>
6,276	<u>6,141</u>

Rule: Subtract 135